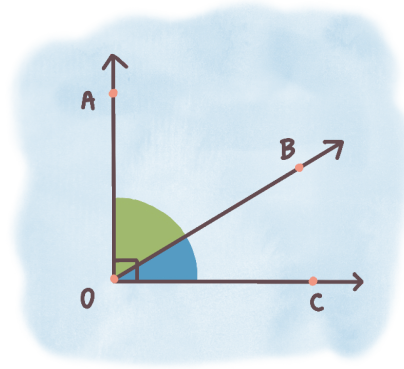


COMPLEMENTARY ANGLES

Two angles are called complementary when their sum adds up to 90 degrees.

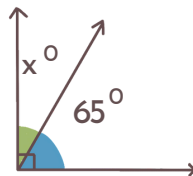


$$\angle AOB + \angle BOC = 90^\circ$$

EXERCISE

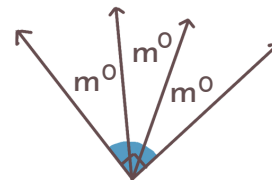
Find the value of the missing angles!

1



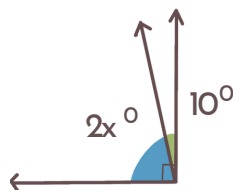
$$x = \underline{\hspace{2cm}}$$

2



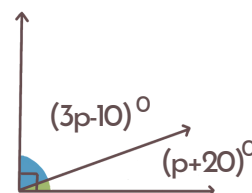
$$m = \underline{\hspace{2cm}}$$

3



$$x = \underline{\hspace{2cm}}$$

4



$$p = \underline{\hspace{2cm}}$$

