



FORCES IN ACTIONS

Look at the illustrations below and identify whether the force being exerted is a contact force or a non-contact force.



1.



2.



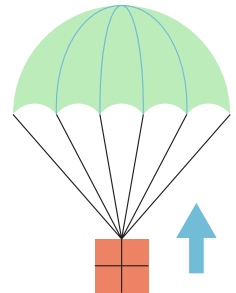
3.




4.




5.



6.



7.



8.



9.

