


ADDITION AND SUBTRACTION WORD PROBLEM


Jack has a very big farm. There are 3 ducks and 5 hens in his garden. How many animals does he have in all?



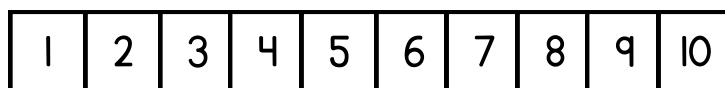
Quick Sketch



Ten Frame



Number Path



Equation



Answer

