



Let's Count the Flowers


Take a look at the flower pictures below. Count and write down the number of flowers in each pot.




$$1 + 2 = \dots\dots\dots$$




$$1 + 1 = \dots\dots\dots$$



$$3 + 2 = \dots\dots\dots$$



$$4 + 1 = \dots\dots\dots$$



$$2 + 3 = \dots\dots\dots$$

