



# ADDITION AND SUBTRACTION

How many spots has each ladybug? Resolve the next addition and subtraction questions and draw the resultant number of spots to each one.


123PORMI.CO




$$5+4=$$




$$2+7=$$




$$9-3=$$




$$6-2=$$




$$8+3=$$




$$7+5=$$



$$6-5=$$



$$7-4=$$



$$10+2=$$